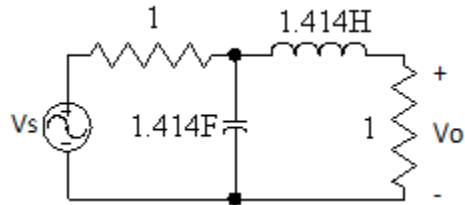


Homework 7 Filters

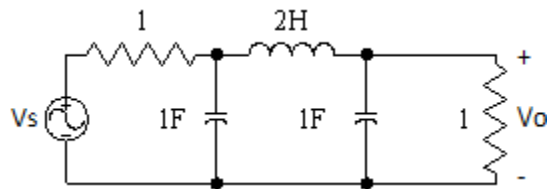
HW31:

Find the transfer function $H(s) = V_o/V_s$ for the circuit below. Describe the filter characteristics.



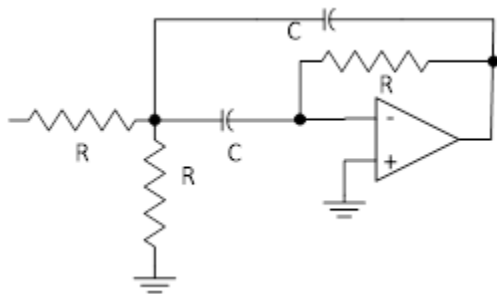
HW32:

Find the transfer function $H(s) = V_o/V_s$ for the circuit below. Describe the filter characteristics.



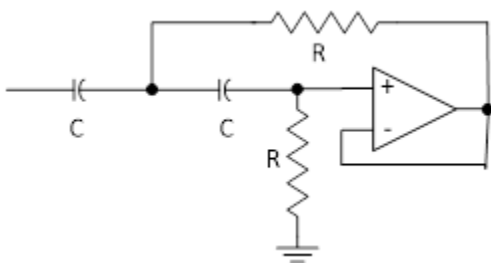
HW33:

Find the transfer function $H(s) = V_o/V_s$ for the circuit below. Describe the filter characteristics.



HW34:

Find the transfer function $H(s) = V_o/V_s$ for the circuit below. Describe the filter characteristics.



HW35:

Find the transfer function $H(s) = V_o/V_s$ for the circuit below. Describe the filter characteristics.

